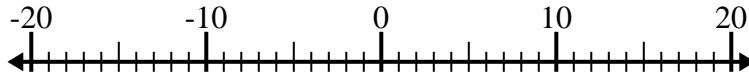


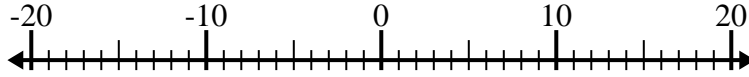


Solve each problem. Use the numberline if needed.

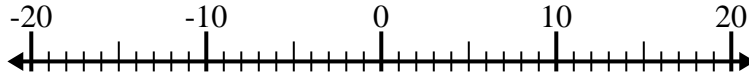
1) $(-9) - 1 =$ _____



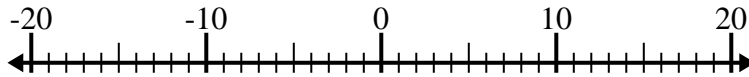
2) $(-13) + (-7) =$ _____



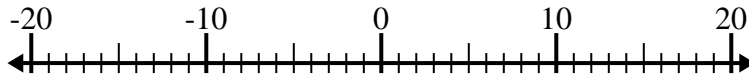
3) $10 + (-4) =$ _____



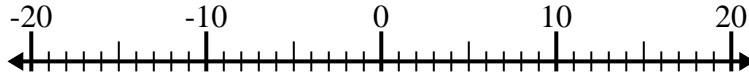
4) $9 - (-3) =$ _____



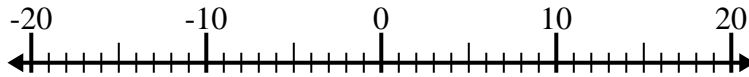
5) $(-11) + 8 =$ _____



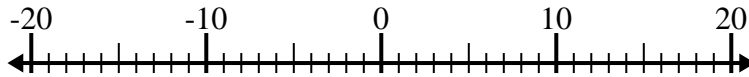
6) $(-12) + 8 =$ _____



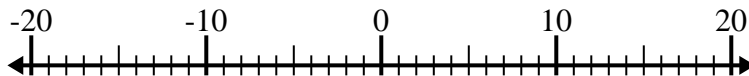
7) $(-9) - 11 =$ _____



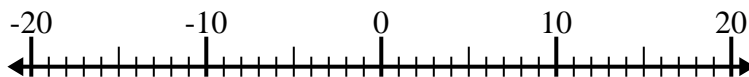
8) $(-1) + (-15) =$ _____



9) $5 - (-4) =$ _____



10) $2 - (-7) =$ _____



Answers

1. _____
2. _____
3. _____
4. _____
5. _____
6. _____
7. _____
8. _____
9. _____
10. _____